

**GENERAL CERTIFICATE OF SECONDARY EDUCATION  
GATEWAY SCIENCE  
SCIENCE B**

**B621/02**

Unit 1 Modules B1 C1 P1 (Higher Tier)

Candidates answer on the question paper.  
A calculator may be used for this paper.

**OCR supplied materials:**  
None

**Other materials required:**

- Pencil
- Ruler (cm/mm)

**Thursday 13 January 2011  
Morning**

**Duration: 1 hour**



Candidate forename		Candidate surname	
-----------------------	--	----------------------	--

Centre number						Candidate number				
---------------	--	--	--	--	--	------------------	--	--	--	--

**INSTRUCTIONS TO CANDIDATES**

- Write your name, centre number and candidate number in the boxes above. Please write clearly and in capital letters.
- Use black ink. Pencil may be used for graphs and diagrams only.
- Read each question carefully. Make sure you know what you have to do before starting your answer.
- Write your answer to each question in the space provided. Additional paper may be used if necessary but you must clearly show your candidate number, centre number and question number(s).
- Answer **all** the questions.
- Do **not** write in the bar codes.

**INFORMATION FOR CANDIDATES**

- The number of marks is given in brackets [ ] at the end of each question or part question.
- A list of physics equations is printed on page two.
- The Periodic Table is printed on the back page.
- The total number of marks for this paper is **60**.
- This document consists of **24** pages. Any blank pages are indicated.

**EQUATIONS**

$$\text{efficiency} = \frac{\text{useful energy output}}{\text{total energy input}}$$

$$\text{energy} = \text{mass} \times \text{specific heat capacity} \times \text{temperature change}$$

$$\text{energy} = \text{mass} \times \text{specific latent heat}$$

$$\text{fuel energy input} = \text{waste energy output} + \text{electrical energy output}$$

$$\text{power} = \text{voltage} \times \text{current}$$

$$\text{energy supplied} = \text{power} \times \text{time}$$

$$\text{energy (kilowatt hours)} = \text{power (kW)} \times \text{time (h)}$$

$$\text{wave speed} = \text{frequency} \times \text{wavelength}$$

**BLANK PAGE**

**Question 1 begins on page 4.**

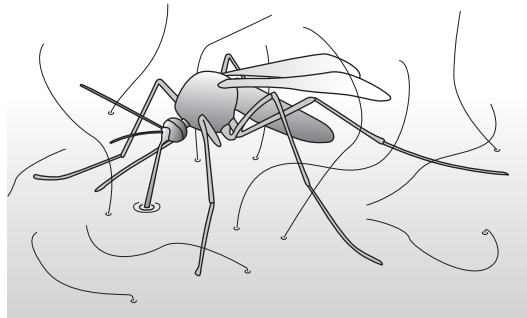
**PLEASE DO NOT WRITE ON THIS PAGE**

Answer **all** the questions.

**Section A – Module B1**

1 This question is about a disease called malaria.

Malaria is spread by mosquitoes.



(a) (i) Malaria is caused by microscopic protozoa called *Plasmodium* living in human blood.

*Plasmodium* is carried from human to human by mosquitoes.

Draw straight lines to connect each **organism** to its **role** in the spread of malaria.

<b>organism</b>	<b>role</b>
human	vector
<i>Plasmodium</i>	host
mosquito	parasite

[2]

(ii) How do mosquitoes spread malaria from one human to another?

.....  
 ..... [1]

(b) Malaria causes a fever.

During a fever the body temperature is very high and this may cause death.

How can a high body temperature cause death?

..... [1]

(c) *Plasmodium* can be controlled by a drug called quinine.

Quinine binds to *Plasmodium* DNA.

(i) DNA contains chemicals called bases.

How many different types of base are found in DNA?

.....

[1]

(ii) The spread of malaria can be reduced by blocking the life cycle of mosquitoes.

Female mosquitoes feed on human blood when producing eggs.

The eggs can be laid in stagnant water.

Use this information to suggest **two** ways of reducing the spread of malaria.

1 .....

.....

2 .....

..... [2]

[Total: 7]

2 Look at the picture of lasu.



He is five years old and lives in an African country called Ethiopia.

lasu suffers from a disorder called kwashiorkor.

He is much smaller than a healthy child of his age.

His diet is missing protein needed for growth.

(a) (i) Proteins from animals are called '**first class** proteins'.

Explain why first class proteins are important in balanced diets.

..... [1]

(ii) The recommended daily average (RDA) intake for protein can be calculated.

lasu has a body mass of 16.0 kg.

Calculate lasu's RDA intake for protein using the formula

$$\text{RDA in g} = 0.75 \times \text{body mass in kg}$$

Show your working.

.....  
 .....

lasu's RDA = ..... g [1]

(b) Sickle cell anaemia is another disorder that occurs in Africa.


Sickle cell anaemia is caused by a **mutation**.

What is a mutation?

..... [1]

3 Look at the picture of Steve.

He has many different characteristics.



(a) (i) Steve is **1.90 m** tall and has a mass of **89.0 kg**.

Steve's height and mass can be used to calculate his body mass index (BMI).

Calculate Steve's body mass index (BMI) using the formula

$$\text{BMI} = \frac{\text{mass in kg}}{(\text{height in m})^2}$$

Show your working.

.....  
 .....

Steve's BMI = ..... [2]

(ii) People with a BMI in the range of 18.5 to 25 are described as being **normal**.

What word is used to describe someone with a BMI below 18.5?

..... [1]

(b) Steve's genes control many of his characteristics including eye colour, blood group and skin colour.

The information for these characteristics is stored in his DNA.

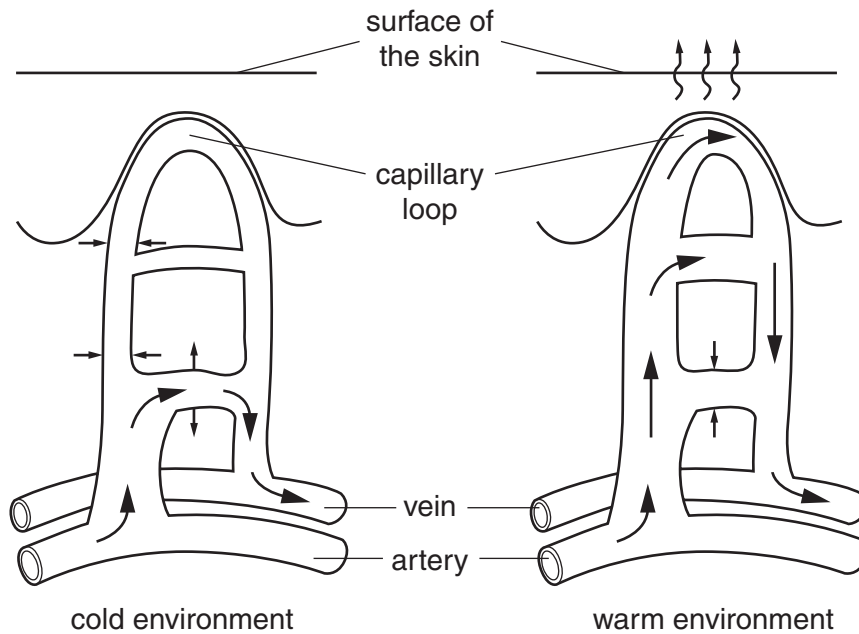
How does DNA **control** the function of cells?

.....  
.....  
..... [2]

[Total: 5]

4 This question is about controlling body temperature.

Look at the diagram.



The diagram shows changes in the skin when the body is in different environments.

(a) These changes help people cool down if they are getting too warm.

Describe how.

In your answer include

- how the blood vessels change
- how these changes help the body cool down.

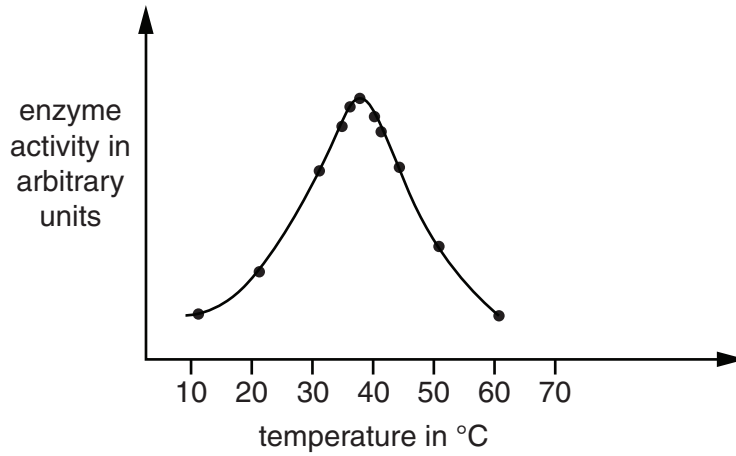
.....  
.....  
.....

[2]



(b) Body cells contain important substances called enzymes.

Look at the graph.



It is important to keep body temperature close to 37°C.

Explain why.

.....  
..... [1]

(c) Sometimes the body temperature is **higher than normal**.

How does the brain detect that the body temperature is higher than normal?

..... [1]

(d) The control of body temperature is an example of **negative feedback**.

What is meant by negative feedback?

.....  
..... [1]

[Total: 5]

## Section B – Module C1

- 5 Look at the food label found on a box of cake-mix.

**Ingredients:**

Wheat flour, Cane juice, Sugar, Vanilla flavouring, Sodium hydrogencarbonate, Cornstarch, Sea salt, Citric acid (E300)

The cake-mix contains sodium hydrogencarbonate.

The sodium hydrogencarbonate makes the cake rise.

Sodium hydrogencarbonate breaks down when heated.

Sodium carbonate, carbon dioxide and water are made.

- (a) (i) Write a **word** equation for this reaction.

..... [1]

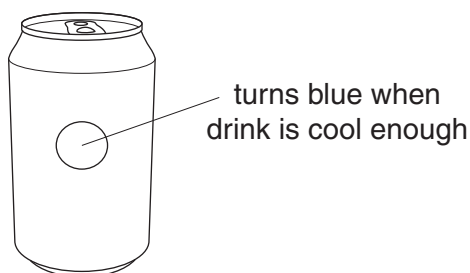
- (ii) Carbon dioxide is made in this reaction.

What is the chemical test for carbon dioxide?

test .....

result ..... [2]

- (b) Some soft drinks in cans taste better if they are cooled.



The spot on the can turns blue when the drink is cold.

This can uses a new type of packaging.

What is the name of this **type** of packaging?

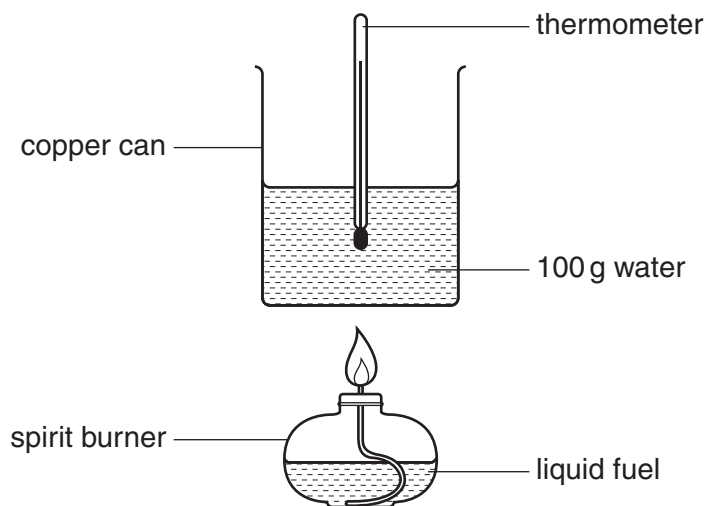
..... [1]

[Total: 4]

6 Zoe and Olivia test three fuels.

Look at the diagram.

It shows the apparatus they use to measure the energy given out by the fuels.



(a) Look at the table. It shows their results.

fuel	temperature of water at start in °C	temperature of water at end in °C	mass of fuel burned in grams
meths	18	38	1.1
propanol	22	42	0.9
petrol	16	36	0.6

Which fuel gives out the **most** energy for each gram of fuel used?

.....

Explain your answer.

.....

..... [3]

(b) Look at the results for petrol.

Burning 0.6 g of petrol transfers 8400J of energy.

Calculate the energy transferred **per gram** of petrol.

.....

.....

answer ..... J/g

[1]

(c) When petrol burns, some bonds are broken and new bonds are made.

Burning petrol is an exothermic reaction.

Explain why. Use ideas about breaking and making bonds.

.....

.....

.....

.....

.....

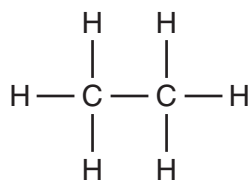
.....

.....

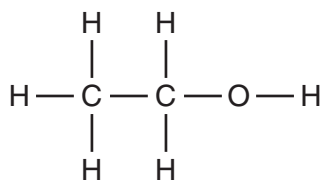
..... [3]

[Total: 7]

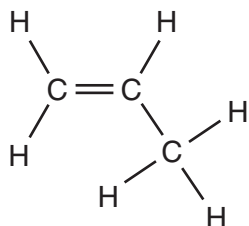
7 Look at the displayed formulas of some compounds.



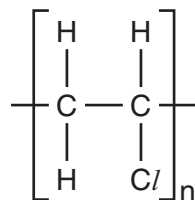
ethane



ethanol



propene



poly(chloroethene)

(a) Propene is an **unsaturated** hydrocarbon.

(i) What is meant by unsaturated?

..... [1]

(ii) Bromine water can be used to test for unsaturation.

Bromine water is added to the hydrocarbon.

What would you **see** when bromine water is added to an unsaturated hydrocarbon?

..... [1]

(b) Poly(chloroethene) is a polymer. It is made by **polymerisation**.

(i) What are the conditions needed for polymerisation?

.....  
 .....  
 ..... [2]

(ii) Draw the displayed formula of the **monomer**, chloroethene.

[1]  
 [Total: 5]

Turn over

8 Look at the table. It shows information about some fuels.

fuel	energy value in megajoules per kg	availability	cost in £ per kg	state
A	48.0	good	£1.30	liquid
B	49.0	limited	£0.80	liquid
C	89.5	good	£0.33	solid
D	37.0	good	£1.30	gas

(a) Which fuel is best for powering a car?

.....

Explain your answer.

.....

.....

..... [2]



(b) Methane, CH<sub>4</sub>, is a fuel.

Methane burns in oxygen, O<sub>2</sub>.

Carbon dioxide and water are made.

Write a **balanced symbol** equation for this reaction.

..... [2]

[Total: 4]

Section C – Module P1

9 Britain is going digital.



(a) Television signals are changing from **analogue** to **digital**.

Draw labelled diagrams to show the difference between analogue and digital signals.

analogue signal

digital signal

[2]

(b) Digital signals allow more information to be transmitted.

Describe how this is possible.

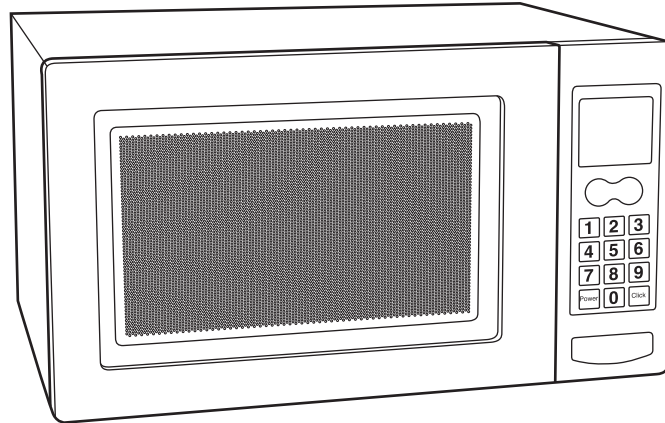
.....

..... [1]

[Total: 3]

10 Microwaves have many uses.

(a) Microwaves are used to cook food.



Look at the statements about microwaves.

Put ticks (✓) in the boxes next to the **two** correct statements.

**statement**

Microwaves do not pass through glass and plastic.

Microwaves are reflected by glass and plastic surfaces.

Microwaves are reflected by metal surfaces.

Microwaves cook from the centre of the food.

Microwaves penetrate about one centimetre into the food.

[2]



(b) Microwaves are also used to transmit mobile phone signals.

It is not always easy to receive a good signal.



Write down one way in which mobile phone companies try to **avoid** signal loss.


.....  
..... [1]

[Total: 3]

11 Houses can be insulated in different ways.

(a) Marie has fibreglass put in her loft.

This reduces energy loss.



(i) Explain why fibreglass reduces energy loss by **conduction**.

.....  
.....  
..... [2]

(ii) Marie pays £250 for the fibreglass in her loft.

She will save £50 every year on her energy bills.

Calculate the payback time.

.....  
.....

answer ..... years

[1]

(b) Cavity wall insulation helps to reduce energy loss by **convection**.

Describe **how energy is transferred** by convection.

In your answer, use ideas about

- density
- air movement.

A diagram may help your answer.

.....

.....

..... [2]

[Total: 5]

12 (a) Diane wants to get a sun tan.



(i) Diane uses sun block to protect herself from the sun.

She knows that she can safely spend 15 minutes in the sun without sun block.

She uses sun block with a sun protection factor (SPF) of 20.

How many minutes can she safely spend in the sun using this sun block?

.....  
.....

answer ..... minutes [1]

(ii) Diane's friend, James, has darker skin than Diane.

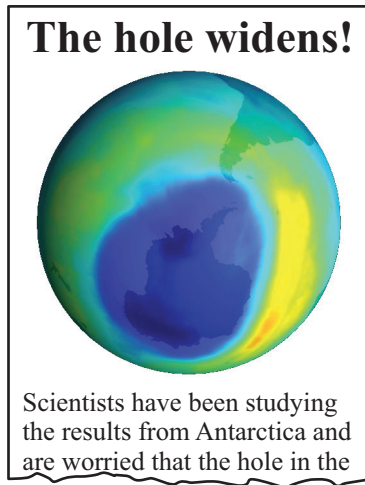
Because of this he has **less** chance of getting skin cancer.

Explain why.

.....  
..... [1]

(b) Some scientists are worried about part of our atmosphere becoming thinner.

Newspapers have dramatic headlines.



(i) Which part of our atmosphere causes scientists to be worried?

..... [1]

(ii) What does this layer do?

..... [1]

(iii) What causes the layer to become thinner?

..... [1]

**[Total: 5]**

13 This question is about uses of light.

(a) The picture shows Sheila using a signalling lamp.



Light messages must be sent using a code.

Describe how light signals are used to send messages in Morse code.

.....  
..... [2]

(b) CD players use laser light to extract information from a compact disc (CD).

(i) How does a CD store information?

..... [1]

(ii) How is the information recovered using laser light?

..... [1]

[Total: 4]

**END OF QUESTION PAPER**

**PLEASE DO NOT WRITE ON THIS PAGE**



**Copyright Information**

OCR is committed to seeking permission to reproduce all third-party content that it uses in its assessment materials. OCR has attempted to identify and contact all copyright holders whose work is used in this paper. To avoid the issue of disclosure of answer-related information to candidates, all copyright acknowledgements are reproduced in the OCR Copyright Acknowledgements Booklet. This is produced for each series of examinations and is freely available to download from our public website ([www.ocr.org.uk](http://www.ocr.org.uk)) after the live examination series.

If OCR has unwittingly failed to correctly acknowledge or clear any third-party content in this assessment material, OCR will be happy to correct its mistake at the earliest possible opportunity.

For queries or further information please contact the Copyright Team, First Floor, 9 Hills Road, Cambridge CB2 1GE.

OCR is part of the Cambridge Assessment Group; Cambridge Assessment is the brand name of University of Cambridge Local Examinations Syndicate (UCLES), which is itself a department of the University of Cambridge.

